

# Areas of Squares & Rectangles 1

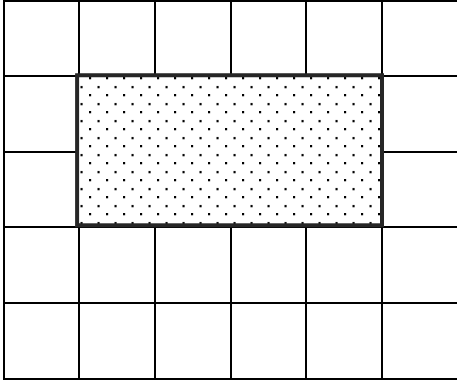
(shown on 1 cm grids)

TransferReady.co.uk



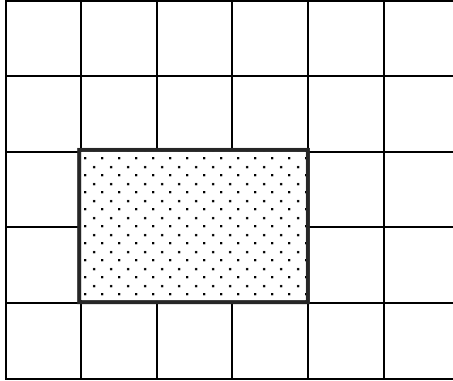
Helping you get ready  
for the Transfer Test

What is the area of the shape?



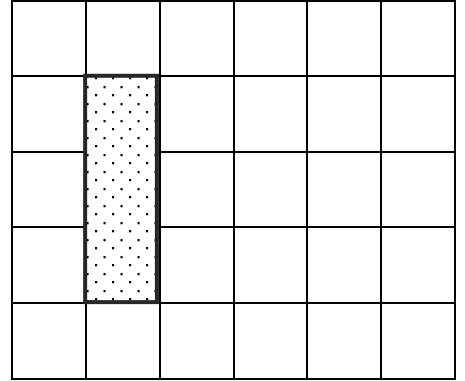
Answer \_\_\_\_\_ cm<sup>2</sup>

What is the area of the shape?



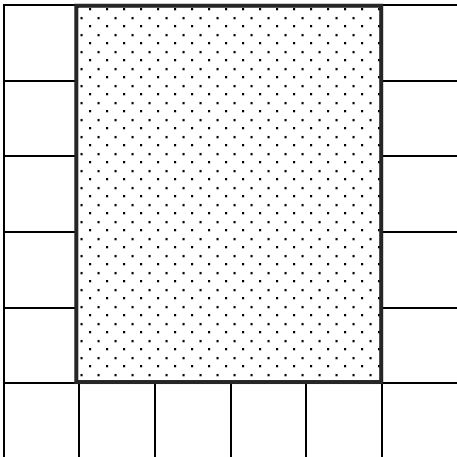
Answer \_\_\_\_\_ cm<sup>2</sup>

What is the area of the shape?



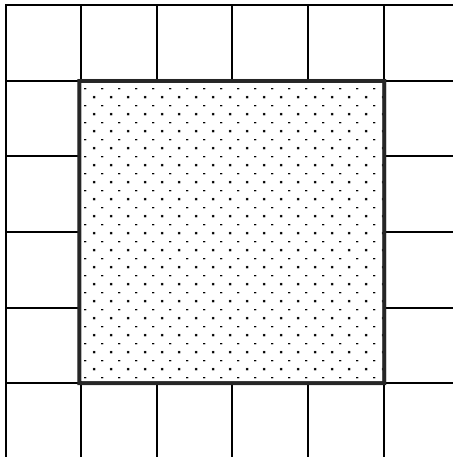
Answer \_\_\_\_\_ cm<sup>2</sup>

What is the area of the shape?



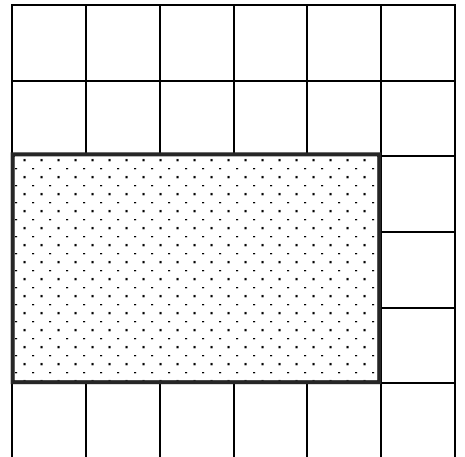
Answer \_\_\_\_\_ cm<sup>2</sup>

What is the area of the shape?



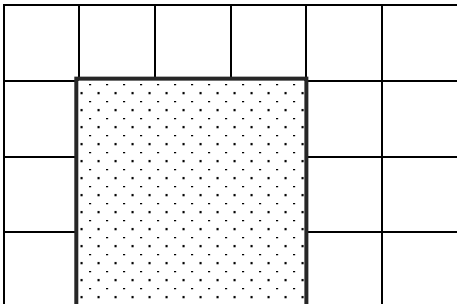
Answer \_\_\_\_\_ cm<sup>2</sup>

What is the area of the shape?



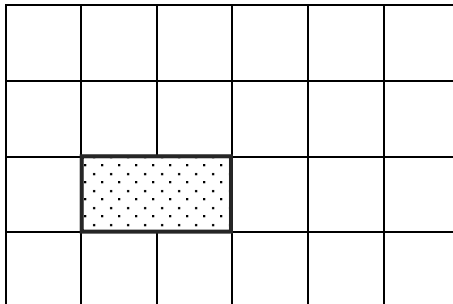
Answer \_\_\_\_\_ cm<sup>2</sup>

What is the area of the shape?




Answer \_\_\_\_\_ cm<sup>2</sup>

What is the area of the shape?



Answer \_\_\_\_\_ cm<sup>2</sup>

What is the area of the shape?



Answer \_\_\_\_\_ cm<sup>2</sup>